

Time: 10 Minutes




Paper Math 4

Total Marks: 10

6th Month, 1st Week, 5th Day | Syllabus: Unit 6: Exercise No. 3 Q No.2

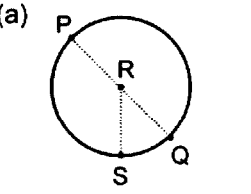
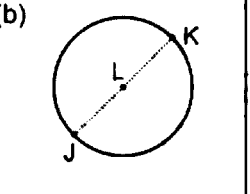
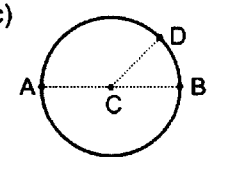
Q.No.1. Draw the parts of following circles: (10)

سوال نمبر 1: درج ذیل دائروں کے حصے بنائیں:

		
Diameter of circle دائرے کا قطر	Radius of circle دائرے کا رداس	Centre of circle دائرے کا مرکز

Q.No.1. Write the names of oparts of circles: (5)

سوال نمبر 1: دائرے کے حصوں کے نام لکھیں:

(a) 	(b) 	(c) 
Centre: _____	Centre: _____	Centre: _____
Diameter: _____	Diameter: _____	Diameter: _____
Radius: _____	Radius: _____	Radius: _____

---



---



---



---

Time: 10 Minutes




Paper Math 4

Total Marks: 10

6th Month, 1st Week, 5th Day | Syllabus: Unit 6: Exercise No. 3 Q No.2

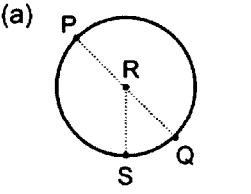
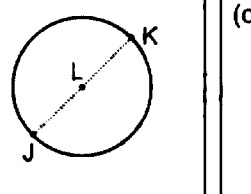
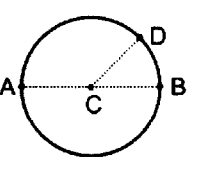
Q.No.1. Draw the parts of following circles: (10)

سوال نمبر 1: درج ذیل دائروں کے حصے بنائیں:

		
Diameter of circle دائرے کا قطر	Radius of circle دائرے کا رداس	Centre of circle دائرے کا مرکز

Q.No.1. Write the names of oparts of circles: (5)

سوال نمبر 1: دائرے کے حصوں کے نام لکھیں:

(a) 	(b) 	(c) 
Centre: _____	Centre: _____	Centre: _____
Diameter: _____	Diameter: _____	Diameter: _____
Radius: _____	Radius: _____	Radius: _____

---



---



---



---